


Recognise equal groups



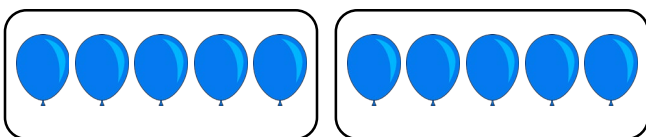
1 Complete the sentences.

a



There are _____ equal groups with _____ in each group.

b




There are _____ equal groups with _____ in each group.

c




There are _____ equal groups with _____ in each group.

d




There are _____ equal groups with _____ in each group.

e



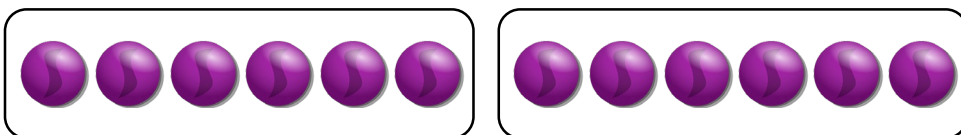
There are _____ equal groups with _____ in each group.

f



There are _____ equal groups with _____ in each group.

g



There are _____ equal groups with _____ in each group.


Recognise equal groups




1 Are these groups equal?

Discuss with your talking partner and explain why.

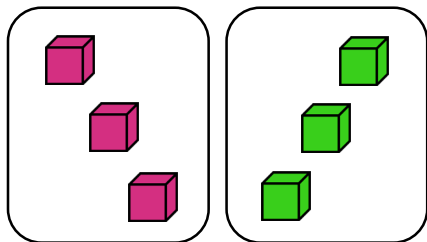
a



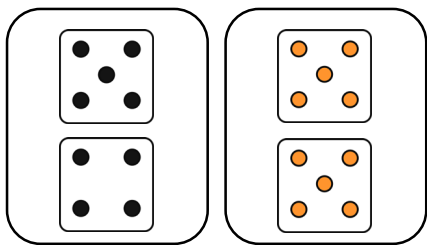
b



c



d



2 There are 5 equal groups with three in each group. Draw a picture to show this.